

Please write clearly in block capitals.

Centre number

--	--	--	--	--

Candidate number

--	--	--	--

Surname

Forename(s)

Candidate signature

I declare this is my own work.

AS MATHEMATICS

Paper 1

Time allowed: 1 hour 30 minutes

Materials

- You must have the AQA Formulae for A-level Mathematics booklet.
- You should have a graphical or scientific calculator that meets the requirements of the specification.

Instructions

- Use black ink or black ball-point pen. Pencil should only be used for drawing.
- Fill in the boxes at the top of this page.
- Answer **all** questions.
- You must answer each question in the space provided for that question. If you need extra space for your answer(s), use the lined pages at the end of this book. Write the question number against your answer(s).
- Show all necessary working; otherwise marks for method may be lost.
- Do all rough work in this book. Cross through any work that you do not want to be marked.

Information

- The marks for questions are shown in brackets.
- The maximum mark for this paper is 80.

Advice

- Unless stated otherwise, you may quote formulae, without proof, from the booklet.
- You do not necessarily need to use all the space provided.

For Examiner's Use	
Question	Mark
1	
2	
3	
4	
5	
6	
7	
8	
9	
10	
11	
12	
13	
14	
15	
TOTAL	



Section AAnswer **all** questions in the spaces provided.

- 1** Find the coefficient of the x term in the binomial expansion of $(3 + x)^4$

Circle your answer.

[1 mark]

12

27

54

108

- 2** Given that $\frac{dy}{dx} = \frac{1}{x}$ find $\frac{d^2y}{dx^2}$

Circle your answer.

[1 mark] $-\frac{2}{x^2}$ $-\frac{1}{x^2}$ $\frac{1}{x^2}$ $\frac{2}{x^2}$ 

3 The graph of the equation $y = \frac{1}{x}$ is translated by the vector $\begin{bmatrix} 3 \\ 0 \end{bmatrix}$

3 (a) Write down the equation of the transformed graph.

[1 mark]

3 (b) State the equations of the asymptotes of the transformed graph.

[2 marks]

Turn over for the next question

Turn over ►



4 $ABCD$ is a trapezium where A is the point $(1, -2)$, B is the point $(7, 1)$ and C is the point $(3, 4)$

DC is parallel to AB .

AD is perpendicular to AB .

4 (a) (i) Find the equation of the line CD .

[2 marks]

4 (a) (ii) Show that point D has coordinates $(-1, 2)$

[3 marks]



4 (b) (i) Find the sum of the length of AB and the length of CD in simplified surd form.

[2 marks]

4 (b) (ii) Hence, find the area of the trapezium $ABCD$.

[2 marks]

Turn over ►

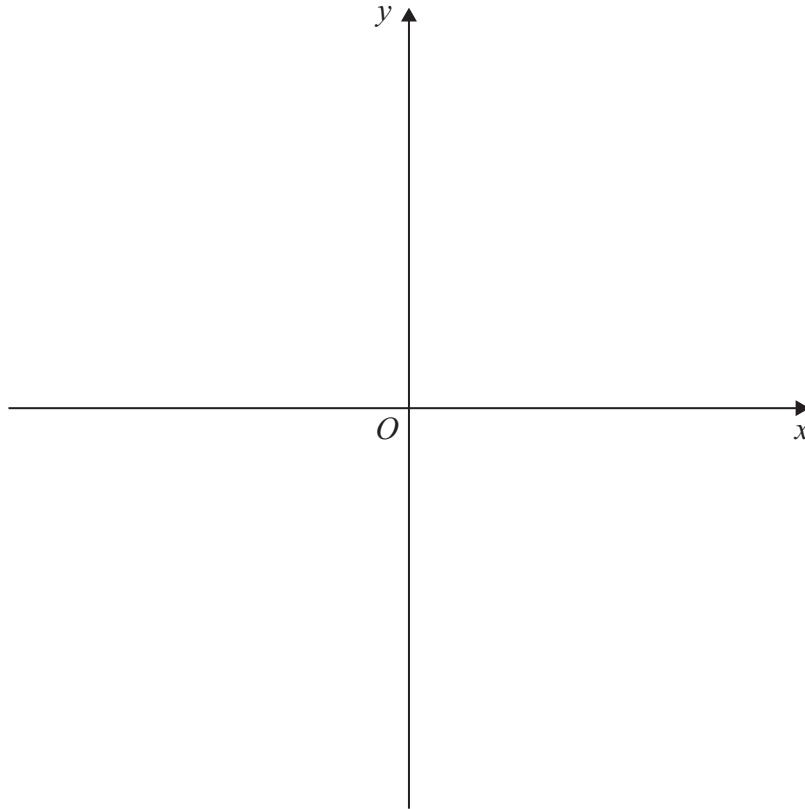


5 (a) Sketch the curve

$$y = (x - a)^2(3 - x) \quad \text{where } 0 < a < 3$$

indicating the coordinates of the points where the curve and the axes meet.

[4 marks]



5 (b) Hence, solve

$$(x - a)^2(3 - x) > 0$$

giving your answer in set notation form.

[2 marks]



A curve has the equation $y = e^{-2x}$

Find the coordinates of P stating your answer in the form $(\ln p, q)$, where p and q are rational.

[illegible]

找名校导师，用小草线上辅导（微信小程序同名）

- 7** Scientists observed a colony of seabirds over a period of 10 years starting in 2010.

They concluded that the number of birds in the colony, its population P , could be modelled by a formula of the form

$$P = a(10^{bt})$$

where t is the time in years after 2010, and a and b are constants.

- 7 (a)** Explain what the value of a represents.

[1 mark]

- 7 (b)** Show that $\log_{10} P = bt + \log_{10} a$

[2 marks]

- 7 (c)** The table below contains some data collected by the scientists.

Year	2013	2015
t	3	
P	10 200	12 800
$\log_{10} P$	4.0086	

- 7 (c) (i)** Complete the table, giving the $\log_{10} P$ value to 5 significant figures.

[1 mark]



7 (c) (ii) Use the data to calculate the value of a and the value of b .

[4 marks]

7 (c) (iii) Use the model to estimate the population of the colony in 2024.

[2 marks]

Question 7 continues on the next page

Turn over ►



- 7 (d) (i)** State an assumption that must be made in using the model to estimate the population of the colony in 2024.

[1 mark]

- 7 (d) (ii)** Hence comment, with a reason, on the reliability of your estimate made in part (c)(iii).

[1 mark]



Turn over for the next question

*Do not write
outside the
box*

**DO NOT WRITE ON THIS PAGE
ANSWER IN THE SPACES PROVIDED**

Find Personal Tutor from www.wisesprout.co.uk

找名校导师，用小草线上辅导（微信小程序同名）

Turn over ►



Find Personal Tutor from www.wisesprout.co.uk

找名校导师，用小草线上辅导（微信小程序同名）

8 (a) (ii) Solve the equation

$$3 \sin \theta \tan \theta = 5 \cos \theta - 2$$

for $-180^\circ \leq \theta \leq 180^\circ$

[2 marks]



8 (b) Hence, deduce all the solutions of the equation

$$3 \sin\left(\frac{1}{2}\theta\right) \tan\left(\frac{1}{2}\theta\right) = 5 \cos\left(\frac{1}{2}\theta\right) - 2$$

for $-180^\circ \leq \theta \leq 180^\circ$, giving your answers to the nearest degree.

[2 marks]

Turn over for the next question

Turn over ►



A curve has equation

where a , b and c are positive constants.

Use the second derivative of y to determine the nature of this turning point.

Fully justify your answer.

[7 marks]

[illegible]

Turn over ►



Section B

Answer **all** questions in the spaces provided.

10

Two forces $\begin{bmatrix} 3 \\ -2 \end{bmatrix}$ N and $\begin{bmatrix} -7 \\ -5 \end{bmatrix}$ N act on a particle.

Find the resultant force.

Circle your answer.

[1 mark]

$$\begin{bmatrix} -21 \\ 10 \end{bmatrix} \text{ N}$$

$$\begin{bmatrix} -4 \\ -7 \end{bmatrix} \text{ N}$$

$$\begin{bmatrix} 4 \\ 3 \end{bmatrix} \text{ N}$$

$$\begin{bmatrix} 10 \\ 7 \end{bmatrix} \text{ N}$$

11

Jackie says:

“A person’s weight on Earth is directly proportional to their mass.”

Tom says:

“A person’s weight on Earth is different to their weight on the moon.”

Only one of the statements below is correct.

Identify the correct statement.

Tick (✓) **one** box.

[1 mark]

Jackie and Tom are both wrong.

☐

Jackie is right but Tom is wrong.

☐

Jackie is wrong but Tom is right.

☐

Jackie and Tom are both right.

☐


12 A particle P lies at rest on a smooth horizontal table.

A constant resultant force, \mathbf{F} newtons, is then applied to P.

As a result P moves in a straight line with constant acceleration $\begin{bmatrix} 8 \\ 6 \end{bmatrix} \text{ m s}^{-2}$

12 (a) Show that the magnitude of the acceleration of P is 10 m s^{-2}

[1 mark]

12 (b) Find the speed of P after 3 seconds.

[1 mark]

12 (c) Given that $\mathbf{F} = \begin{bmatrix} 2 \\ 1.5 \end{bmatrix} \text{ N}$, find the mass of P.

[2 marks]

Turn over for the next question

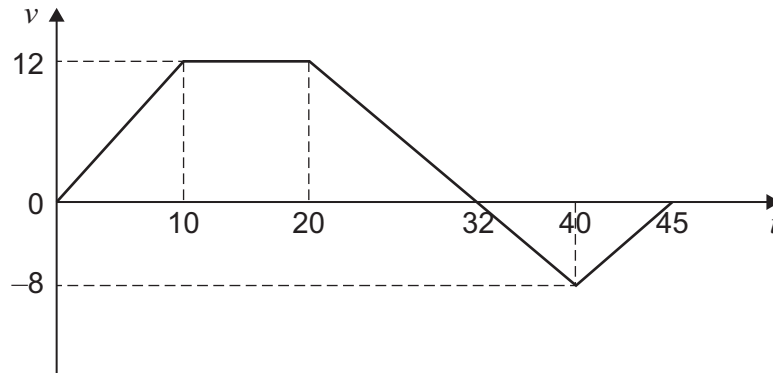
Turn over ►



13

A car, initially at rest, is driven along a straight horizontal road.

The graph below is a simple model of how the car's velocity, v metres per second, changes with respect to time, t seconds.

**13 (a)**

Find the displacement of the car when $t = 45$

[3 marks]

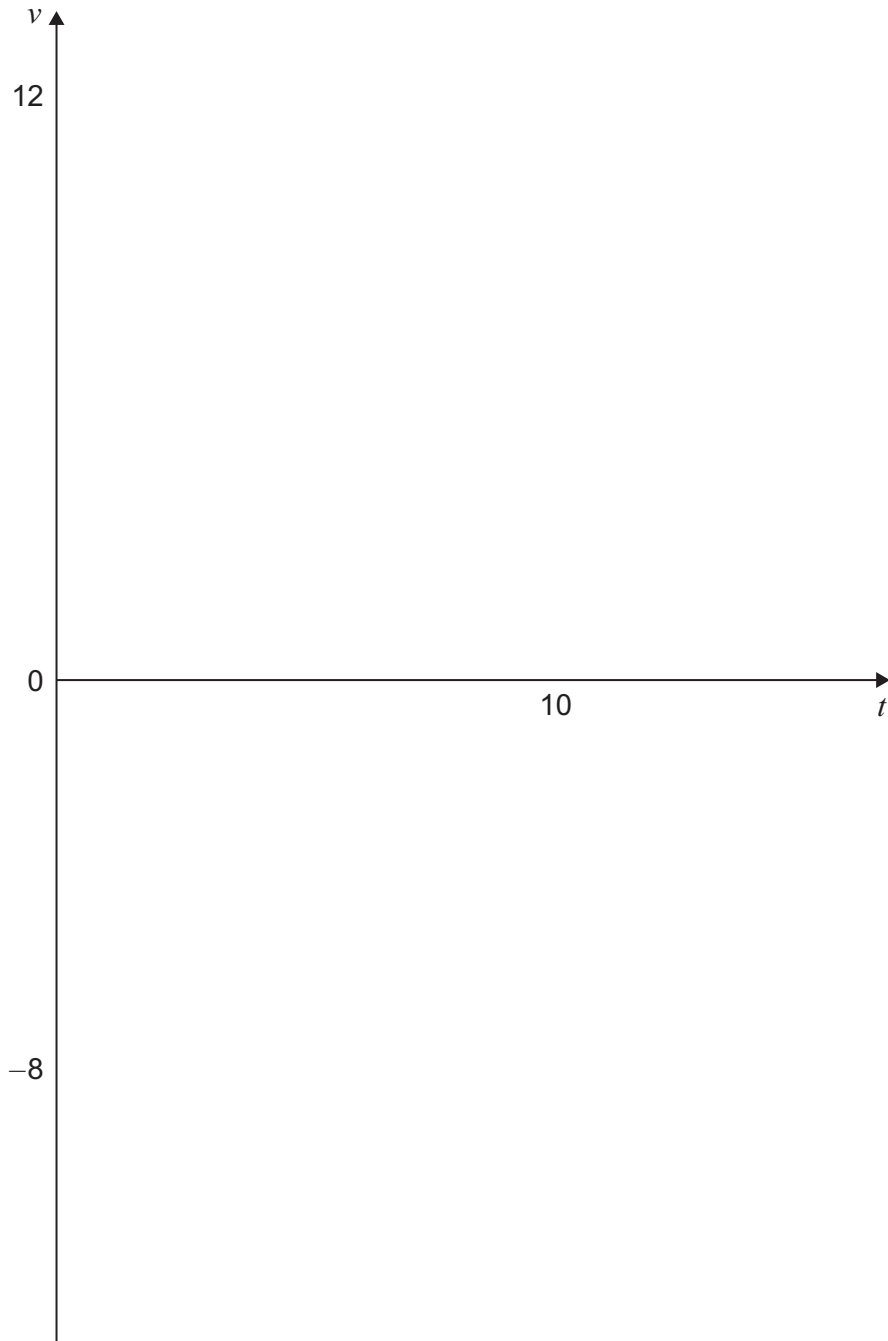


13 (b)

Shona says:

“This model is too simple. It is unrealistic to assume that the car will instantaneously change its acceleration.”

On the axes below sketch a graph, for the first 10 seconds of the journey, which would represent a more realistic model.

[2 marks]**Turn over ►**

$$a = 3 + 0.2t$$

14 (a) Show that the initial velocity of P is given by the expression $(k - 6.4) \text{ m s}^{-1}$

[illegible]

Find the value of k .

This image shows a blank sheet of white paper with horizontal ruling lines. The lines are evenly spaced and run across the width of the page. There are no margins or other markings on the paper.

Find Personal Tutor from www.wisesprout.co.uk

找名校导师，用小草线上辅导（微信小程序同名）

Turn over ►



15

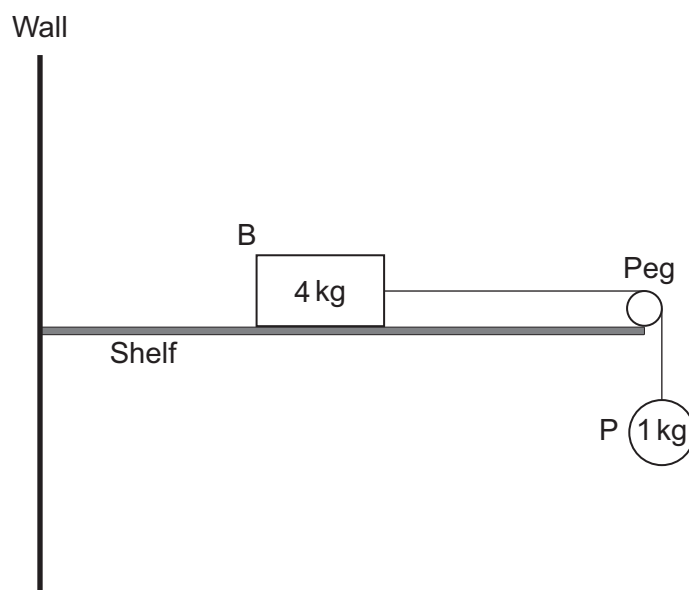
In this question, use $g = 10 \text{ m s}^{-2}$

A box, B, of mass 4 kg lies at rest on a fixed rough horizontal shelf.

One end of a light string is connected to B.

The string passes over a smooth peg, attached to the end of the shelf.

The other end of the string is connected to particle, P, of mass 1 kg, which hangs freely below the shelf as shown in the diagram below.



B is initially held at rest with the string taut.

B is then released.

B and P both move with constant acceleration $a \text{ m s}^{-2}$

As B moves across the shelf it experiences a **total** resistance force of 5 N

15 (a)

State one type of force that would be included in the total resistance force.

[1 mark]



[4 marks]

[illegible]

[4 marks]

[illegible]

- 15 (d)** State one assumption **you** have made when finding your solutions in parts **(b)** or **(c)**. **[1 mark]**

END OF QUESTIONS



There are no questions printed on this page

*Do not write
outside the
box*

**DO NOT WRITE ON THIS PAGE
ANSWER IN THE SPACES PROVIDED**

Find Personal Tutor from www.wisesprout.co.uk

找名校导师，用小草线上辅导（微信小程序同名）



[illegible]

[illegible]

Question number	<p align="center">Additional page, if required. Write the question numbers in the left-hand margin.</p>
	<div style="border-bottom: 1px dotted black; height: 15px; margin-bottom: 5px;"></div> <div style="border-bottom: 1px dotted black; height: 15px; margin-bottom: 5px;"></div> <div style="border-bottom: 1px dotted black; height: 15px; margin-bottom: 5px;"></div> <div style="border-bottom: 1px dotted black; height: 15px; margin-bottom: 5px;"></div> <div style="border-bottom: 1px dotted black; height: 15px; margin-bottom: 5px;"></div> <div style="border-bottom: 1px dotted black; height: 15px; margin-bottom: 5px;"></div> <div style="border-bottom: 1px dotted black; height: 15px; margin-bottom: 5px;"></div> <div style="border-bottom: 1px dotted black; height: 15px; margin-bottom: 5px;"></div> <div style="border-bottom: 1px dotted black; height: 15px; margin-bottom: 5px;"></div> <div style="border-bottom: 1px dotted black; height: 15px; margin-bottom: 5px;"></div> <div style="border-bottom: 1px dotted black; height: 15px; margin-bottom: 5px;"></div> <div style="border-bottom: 1px dotted black; height: 15px; margin-bottom: 5px;"></div> <div style="border-bottom: 1px dotted black; height: 15px; margin-bottom: 5px;"></div> <div style="border-bottom: 1px dotted black; height: 15px; margin-bottom: 5px;"></div> <div style="border-bottom: 1px dotted black; height: 15px; margin-bottom: 5px;"></div> <div style="border-bottom: 1px dotted black; height: 15px; margin-bottom: 5px;"></div> <div style="border-bottom: 1px dotted black; height: 15px; margin-bottom: 5px;"></div> <div style="border-bottom: 1px dotted black; height: 15px; margin-bottom: 5px;"></div> <div style="border-bottom: 1px dotted black; height: 15px; margin-bottom: 5px;"></div> <div style="border-bottom: 1px dotted black; height: 15px; margin-bottom: 5px;"></div> <div style="border-bottom: 1px dotted black; height: 15px; margin-bottom: 5px;"></div>
	<p>Copyright information</p> <p>For confidentiality purposes, all acknowledgements of third-party copyright material are published in a separate booklet. This booklet is published after each live examination series and is available for free download from www.aqa.org.uk.</p> <p>Permission to reproduce all copyright material has been applied for. In some cases, efforts to contact copyright-holders may have been unsuccessful and AQA will be happy to rectify any omissions of acknowledgements. If you have any queries please contact the Copyright Team.</p> <p>Copyright © 2021 AQA and its licensors. All rights reserved.</p>

